


What Percentage is Shaded?

Name: _____ Class: _____

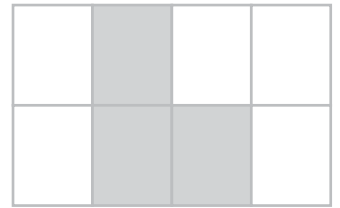
What percentage of each figure is shaded?
Give your answer in whole numbers or mixed numbers.



Shaded: _____



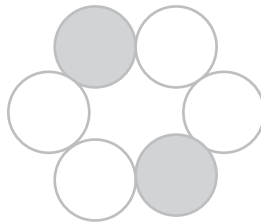
Shaded: _____




Shaded: _____



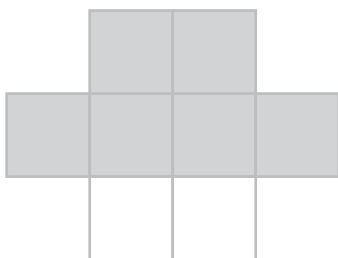
Shaded: _____




Shaded: _____



Shaded: _____



Shaded: _____



Shaded: _____




Shaded: _____

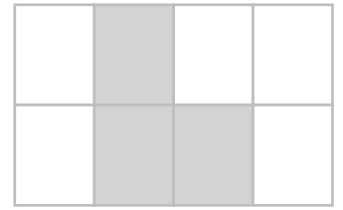
Answers



Shaded: 50%



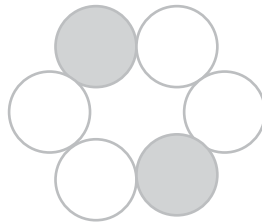
Shaded: 25%




Shaded: $37\frac{1}{2}\%$




Shaded: 50%




Shaded: $33\frac{1}{3}\%$



Shaded: $66\frac{2}{3}\%$



Shaded: 75%



Shaded: 40%



Shaded: 100%